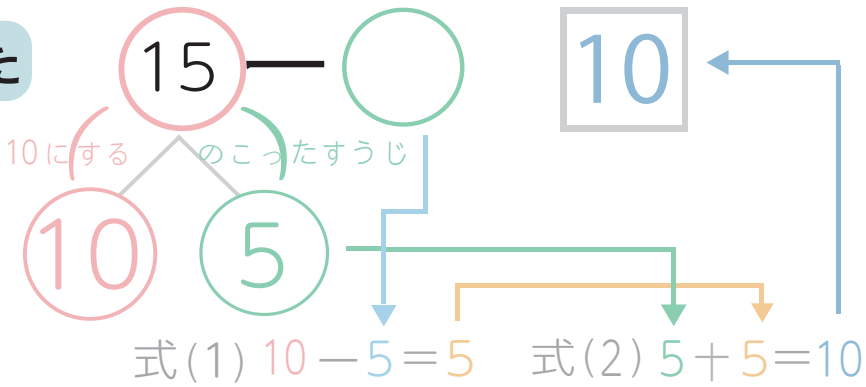


# さんすう


がつ	にち	なまえ
----	----	-----

(1) つぎの けいさんを しましょう。


やりかた




1  $12 - 4 = \square$




2  $14 - 6 = \square$




3  $17 - 5 = \square$



4  $15 - 7 = \square$



6  $16 - 8 = \square$



5  $18 - 9 = \square$

