

さんすう

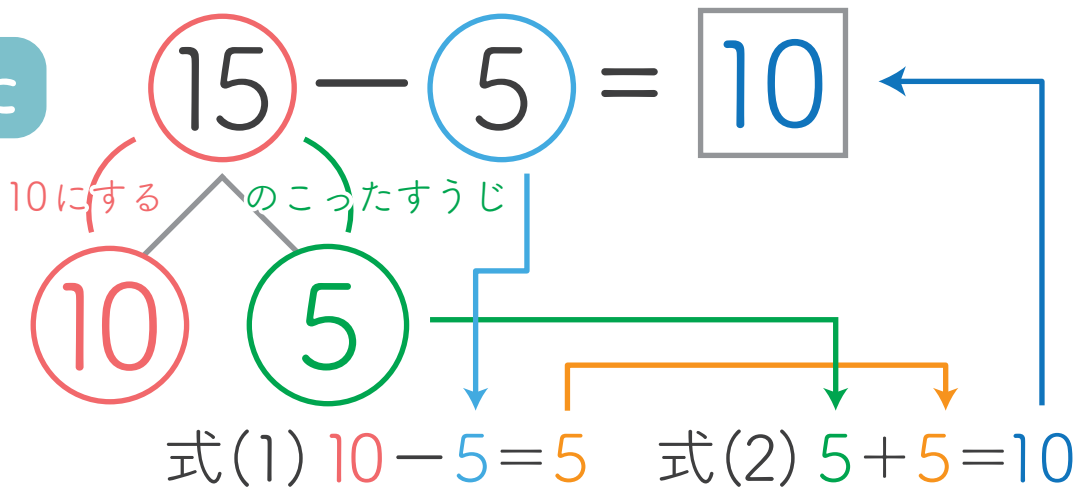
がつ

にち


なまえ

(1) つぎの けいさんを しましょう。


やりかた




① $12 - 4 = \square$




② $14 - 6 = \square$




③ $17 - 5 = \square$



④ $15 - 7 = \square$



⑤ $16 - 8 = \square$



⑥ $18 - 9 = \square$

